

## Year 2 Home Learning

Friday 2nd October

Hello Year Two. Here are your activities for today. Have a lovely weekend!

### Guided Reading

Read the following extract very carefully. Ask a grownup to help you if there are words you are unsure of.

Week 2



#### The Giraffe and the Pelly and Me

A few moments later, a white porcelain lavatory pan with the wooden seat still on it came flying out of the same window and landed with a splintering crash just beside the bathtub. This was followed by a kitchen sink and an empty canary-cage and a four-poster bed and two hot-water bottles and a rocking horse and a sewing machine and goodness knows what else besides.

It looked as though some madman was ripping out the whole of the inside of the house, because now pieces of staircase and bits of the banisters and a whole lot of old floorboards came whistling through the windows.



Now complete the following task. Remember that you can always read the text again to make sure that you draw the items in the correct order.

Learning Goals:

I can show I understand the words in the text.

I can find information in the text.



Independent  
Paired work  
Group work  
Supported  
Verbal  
Feedback



### Fiction - The Giraffe and the Pelly and Me

Draw a picture of everything that came out of the window in order, and then label it.

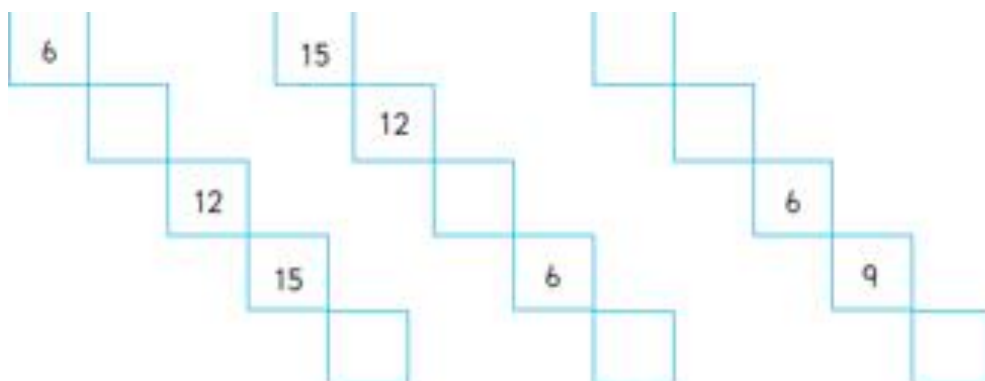
Extension - Think of 3 more items that could have been thrown out of the window and draw and label them too, using expanded noun phrases!

## Maths

We are learning to count in 3's. Can you colour in every third square? This will help you.

1	2	3	4	5	6	7	8	9	10
11	12	13	14	15	16	17	18	19	20
21	22	23	24	25	26	27	28	29	30
31	32	33	34	35	36	37	38	39	40
41	42	43	44	45	46	47	48	49	50
51	52	53	54	55	56	57	58	59	60
61	62	63	64	65	66	67	68	69	70
71	72	73	74	75	76	77	78	79	80
81	82	83	84	85	86	87	88	89	90
91	92	93	94	95	96	97	98	99	100


Now try to fill in the missing numbers.



Leanna has 6 football cards.

She collects 3 more every day.


Complete the number track to show how many she will have in 6 days.



Tia has 15 football cards.

She collects 3 more every day.


Complete the number track to show how many she will have in 4 days.



Rosie has 0 football cards.

She collects 3 every day.

Complete the number track to show how many she will have in 5 days.



Try the reasoning problems. Remember to explain your answer as fully as you can!

True or False?



Leanna

I start at 0 and count in 3s.  
I say the number 6.



Rosie

I start at 0 and count in 3s.  
I say the number 11.



Tia

I start at 0 and count in 3s.  
I say the number 9.

Tia is counting in 1s, Rosie is counting in 2s.


Tia	1	2	3	4
Rosie	2	4	6	8
+				


If we add our numbers  
together as we count we  
can make a new pattern.




What pattern do they make?  
What happens if both Tia and Rosie  
count in 1s and they add them together  
to make a new pattern?

True or False?

 I start at 0 and count in 3s.  
I say the number 18.

 I start at 6 and count in 3s.  
I say the number 22.

 I start at 0 and count in 3s.  
I say the number 19.



Leanna



Rosi



Tia	4	6	8	10
Rosie	6	9	12	15
+				



What happens if both Tia and Rosie count in 5s and they add them together to make a new pattern?


www.sagepub.com at 128.190.254.254

It's day five already and what a busy week you have had!



Today we are going to think about what happens to all of those materials when we don't need them anymore.

- Watch the video about recycling on youtube: [learningmole.com](https://www.learningmole.com). Why is recycling important?



- What does this symbol mean? →
- Have a look for the symbol on packets and boxes in your home (ask an adult first)
- Can you design a poster or draw a story map to help people to remember to recycle their unused materials?

